

Name: \_\_\_\_\_

# Parallel and Perpendicular Lines

★ Part I – The following sets of lines are either parallel or perpendicular. Check the correct box for each set of lines.



- parallel  
 perpendicular




- parallel  
 perpendicular




- parallel  
 perpendicular



- parallel  
 perpendicular



- parallel  
 perpendicular




- parallel  
 perpendicular

★ Part II – Draw the correct line to complete each set.



perpendicular



parallel



perpendicular

Name: \_\_\_\_\_

# Parallel and Perpendicular Lines

Part I – The following sets of lines are either parallel or perpendicular. Check the correct box for each set of lines.



- parallel  
 perpendicular




- parallel  
 perpendicular



- parallel  
 perpendicular



- parallel  
 perpendicular




- parallel  
 perpendicular




- parallel  
 perpendicular


Part II – Draw the correct line to complete each set.



perpendicular



parallel



perpendicular