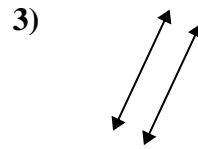
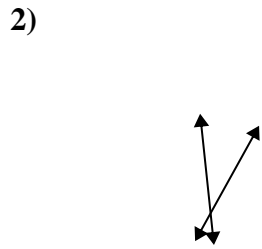
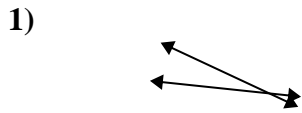




Use 'parallel', 'perp'(perpendicular) or 'inter'(intersecting) to describe the lines.

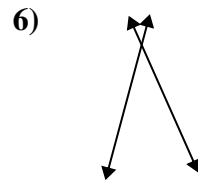
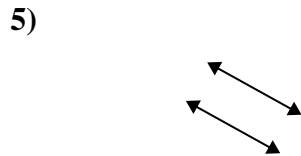
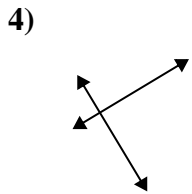
Answers



1. _____

2. _____

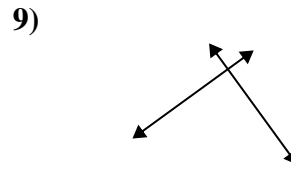
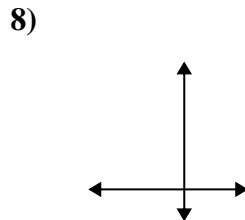
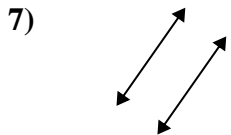
3. _____



4. _____

5. _____

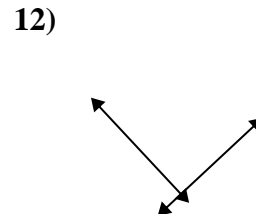
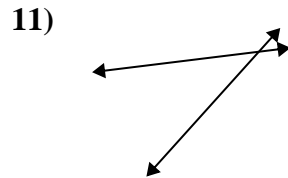
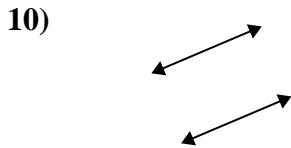
6. _____



7. _____

8. _____

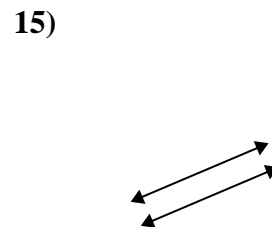
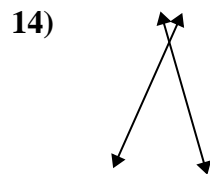
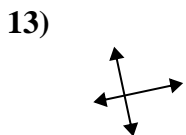
9. _____



10. _____

11. _____

12. _____



13. _____

14. _____

15. _____