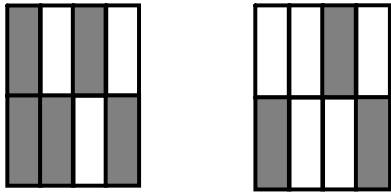


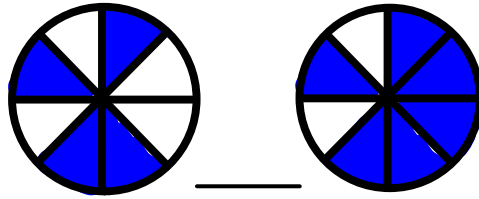
Name: \_\_\_\_\_

Compare the two models.



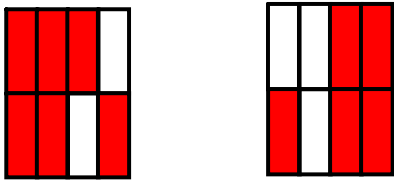
Which symbol best replaces the blank line?

< > =



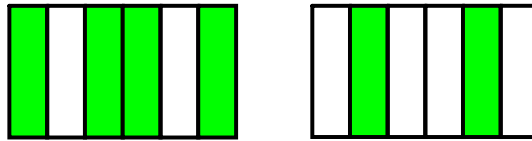
Which symbol best replaces the blank line?

< > =



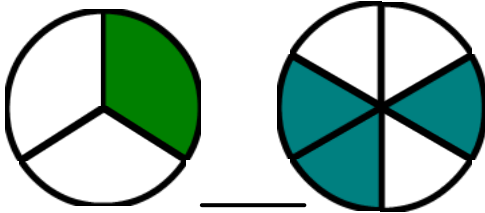
Which symbol best replaces the blank line?

< > =



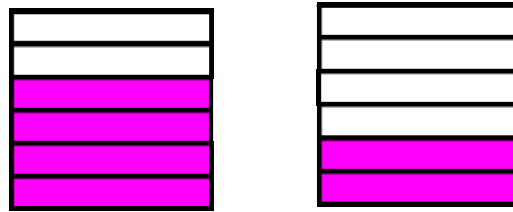
Which symbol best replaces the blank line?

< > =



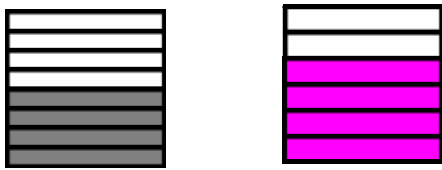
Which symbol best replaces the blank line?

< > =



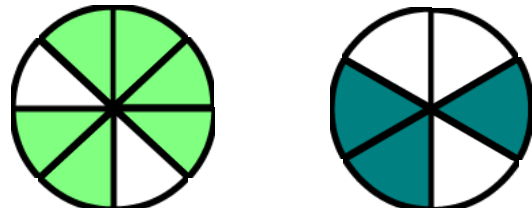
Which symbol best replaces the blank line?

< > =



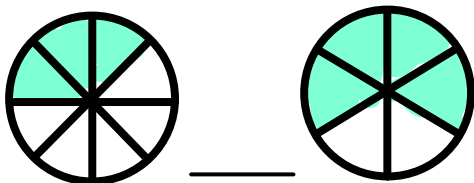
Which symbol best replaces the blank line?

< > =



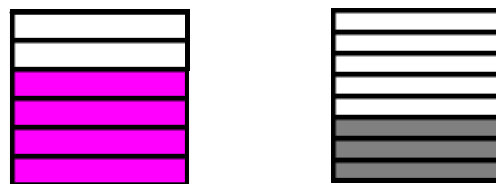
Which symbol best replaces the blank line?

< > =



Which symbol best replaces the blank line?

< > =



Which symbol best replaces the blank line?

< > =