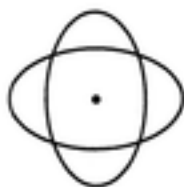


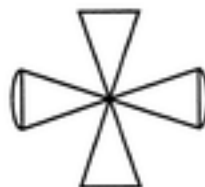
Rotational Symmetry

1. Use tracing paper to determine the order of rotational symmetry of each of the following shapes.

(1)



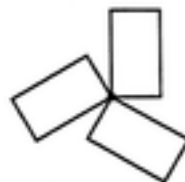
(3)




(2)



(4)



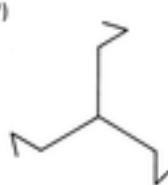
(5)



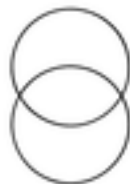
(6)



(7)



(8)



(9)

