

Find the order of rotation of these shapes:




.....



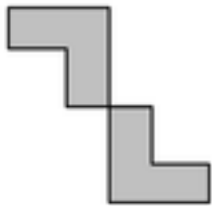
.....



.....



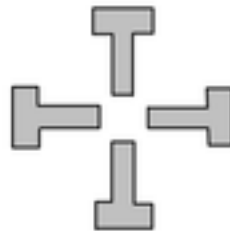
.....



.....



.....



.....