

* DO NOT WORRY about point of symmetry *

Date: _____ Name: _____.

A figure has a **line of symmetry**, if it can be folded along a line so that the two halves match.

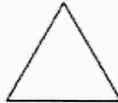
A figure has a **point of symmetry**, if it is a midpoint of all segments between the preimage and image points

Determine how many lines of symmetry each figure has. Then ~~determine whether the figure has point symmetry.~~

1.



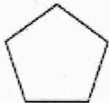
2.



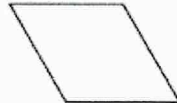
3.



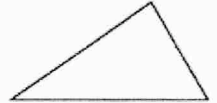
4.



5.




6.



7.



8.



9.

