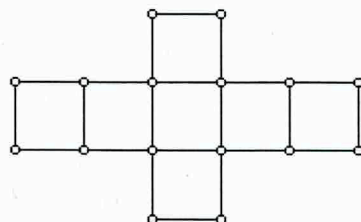


An image has **Reflectional Symmetry** if there exists a line that can be drawn such that the image on one side of the line coincides with the image on the other side of the line. Sometimes reflectional symmetry is referred to as a **FLIP**.

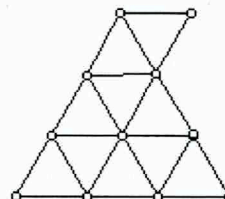
Symmetry

Draw all lines of symmetry on each figure below. If the figure does not have a line of symmetry, state that.

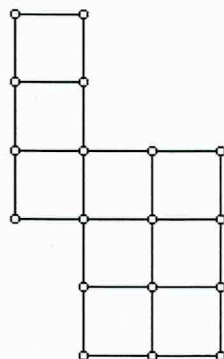
1.



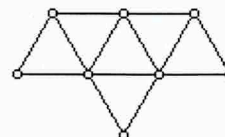
2.



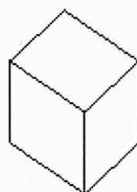
3.



4.



5.



6.

