

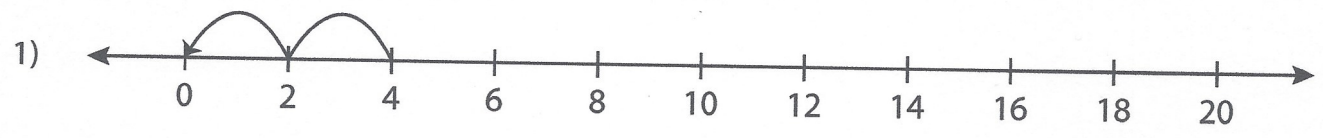
Name: \_\_\_\_\_

Score: \_\_\_\_\_

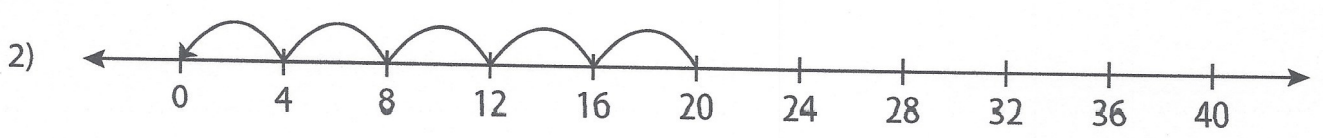
# Number Line Division - MCQ

Sheet 1

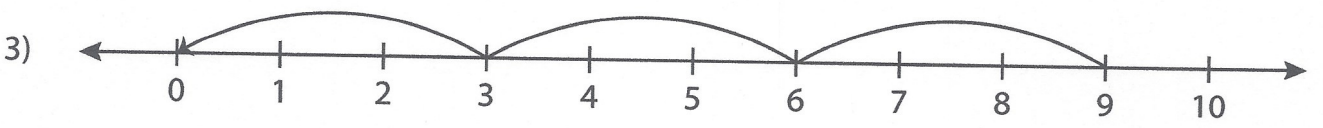
Identify the correct division sentence for each number line.



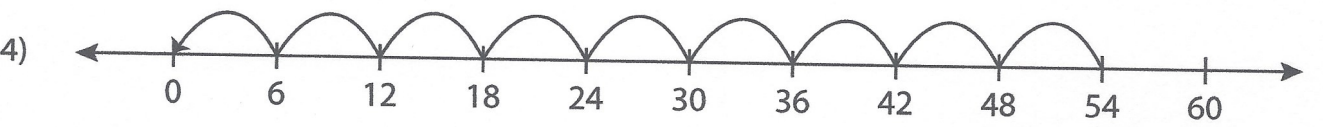
- a)  $14 \div 7 = 2$       b)  $4 \div 2 = 2$       c)  $20 \div 2 = 10$       d)  $4 \div 1 = 4$



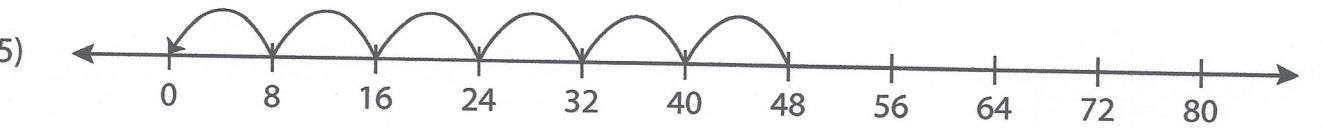
- a)  $20 \div 5 = 4$       b)  $40 \div 5 = 8$       c)  $12 \div 4 = 3$       d)  $20 \div 4 = 5$



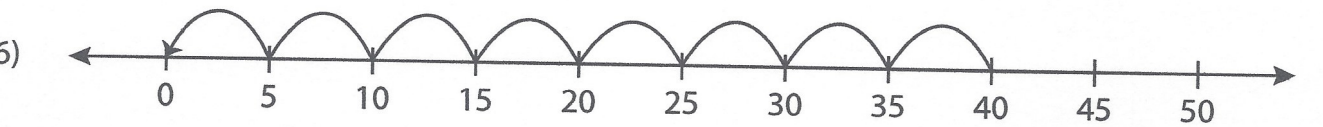
- a)  $9 \div 3 = 3$       b)  $18 \div 6 = 3$       c)  $9 \div 1 = 9$       d)  $6 \div 3 = 2$



- a)  $54 \div 9 = 6$       b)  $36 \div 6 = 6$       c)  $54 \div 6 = 9$       d)  $60 \div 6 = 10$



- a)  $80 \div 8 = 10$       b)  $48 \div 8 = 6$       c)  $32 \div 8 = 4$       d)  $48 \div 6 = 8$



- a)  $45 \div 5 = 9$       b)  $50 \div 10 = 5$       c)  $40 \div 10 = 4$       d)  $40 \div 5 = 8$