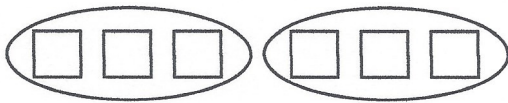



Integer Multiplication with Two – Colored Counters

EXAMPLES:

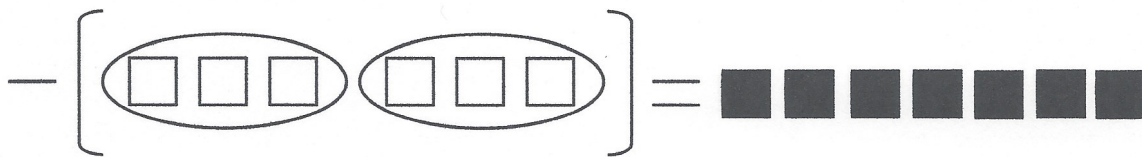
A.) $2 \cdot 3$This problem means “two groups of three”



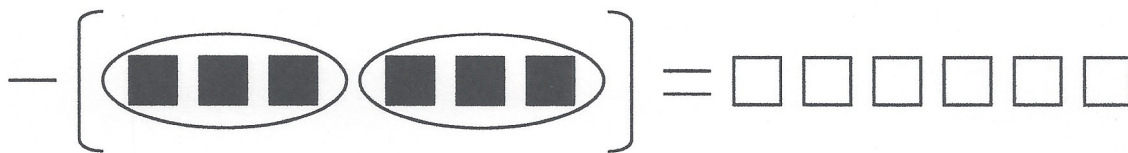
B.) $2 \cdot -3$This problem means _____



C.) $-2 \cdot 3$This problem means “the opposite of two groups of three”



D.) $-2 \cdot -3$This problem means _____



Match the problem with the correct model and answer. Color all matches the same.

Problem	Model	Answer
$2 \cdot 4$		-10
$2 \cdot -4$		-8
$-2 \cdot 5$		6
$-2 \cdot -5$		10
$3 \cdot 2$		8
$3 \cdot -2$		-6