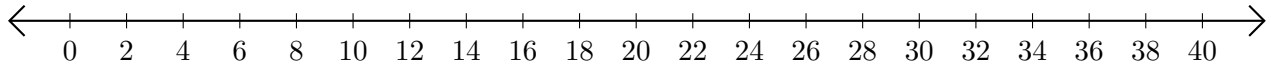


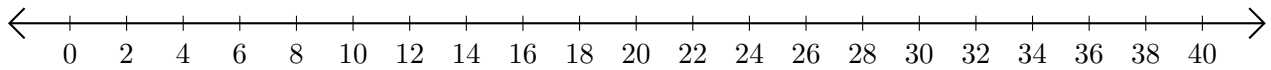
# Adding on Number Lines (D)

Use the number lines to calculate each sum.

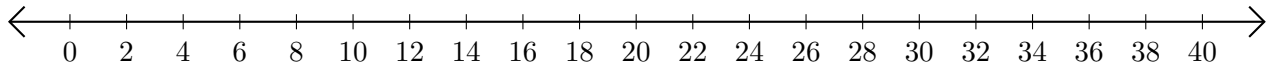
1.  $30 + 8 = \underline{\quad}$



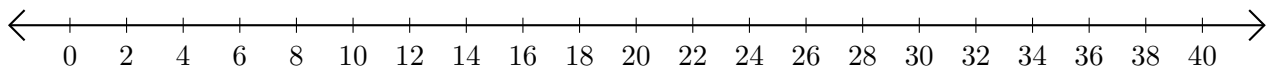
2.  $12 + 8 = \underline{\quad}$



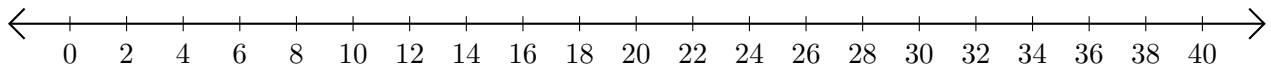
3.  $38 + 2 = \underline{\quad}$



4.  $26 + 12 = \underline{\quad}$



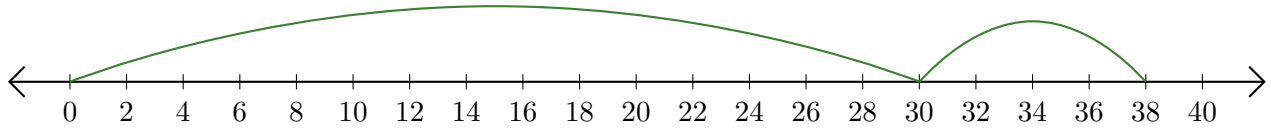
5.  $10 + 28 = \underline{\quad}$



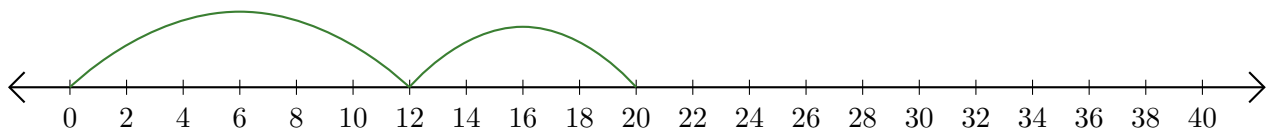
# Adding on Number Lines (D) Answers

Use the number lines to calculate each sum.

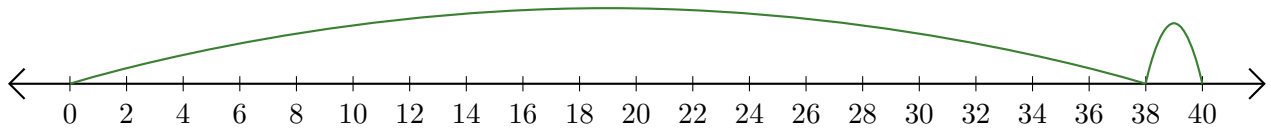
1.  $30 + 8 = \underline{38}$



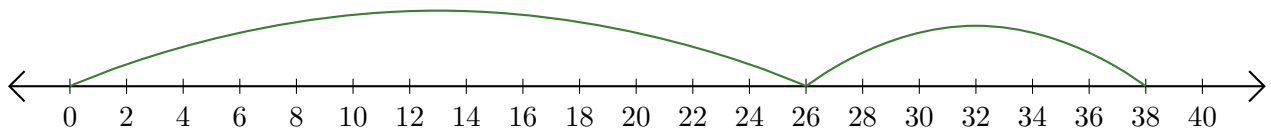
2.  $12 + 8 = \underline{20}$



3.  $38 + 2 = \underline{40}$



4.  $26 + 12 = \underline{38}$



5.  $10 + 28 = \underline{38}$

