

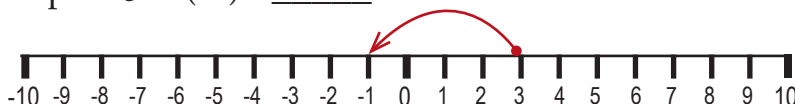
Name: \_\_\_\_\_

# Integer Addition With a Number Line

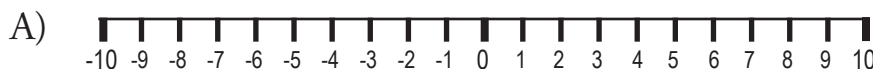
Find the correct answer for each problem below. Draw your answer on the number line provided and write the answer in the space provided.

Remember: When adding a positive integer, move to the right on the number line. When adding a negative integer, move to the left on the number line.

Example:  $3 + (-4) = \underline{-1}$



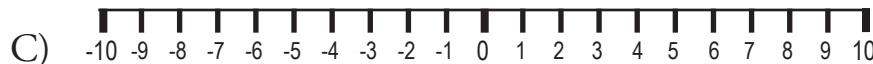
$$3 + (-4) = \underline{-1}$$



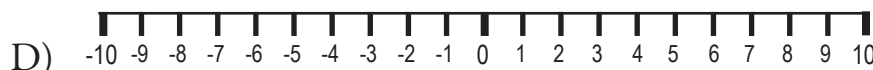
$$5 + 2 = \underline{\hspace{2cm}}$$



$$8 + (-5) = \underline{\hspace{2cm}}$$



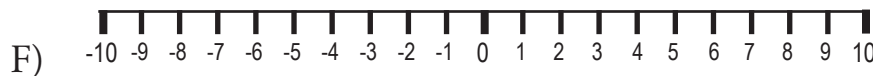
$$-6 + 4 = \underline{\hspace{2cm}}$$



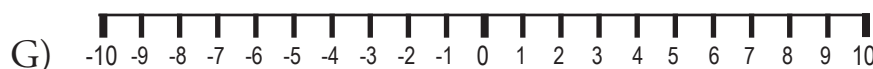
$$5 + (-9) = \underline{\hspace{2cm}}$$



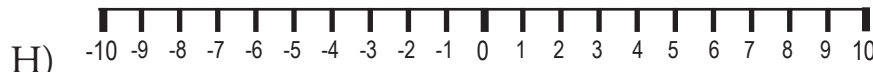
$$-3 + 7 = \underline{\hspace{2cm}}$$



$$-2 + (-8) = \underline{\hspace{2cm}}$$



$$-5 + 6 = \underline{\hspace{2cm}}$$



$$-4 + (-4) = \underline{\hspace{2cm}}$$

Name: \_\_\_\_\_

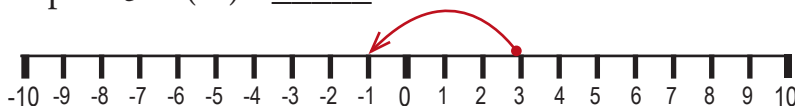
Key

# Integer Addition With a Number Line

Find the correct answer for each problem below. Draw your answer on the number line provided and write the answer in the space provided.

Remember: When adding a positive integer, move to the right on the number line. When adding a negative integer, move to the left on the number line.

Example:  $3 + (-4) = \underline{-1}$



$$3 + (-4) = \underline{-1}$$

A)



$$5 + 2 = \underline{7}$$

B)



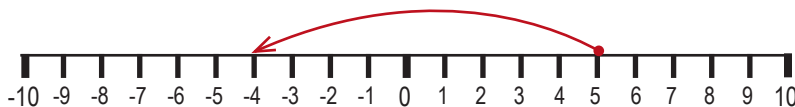
$$8 + (-5) = \underline{3}$$

C)



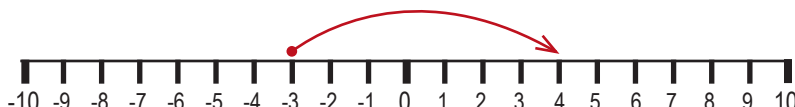
$$-6 + 4 = \underline{-2}$$

D)



$$5 + (-9) = \underline{-4}$$

E)



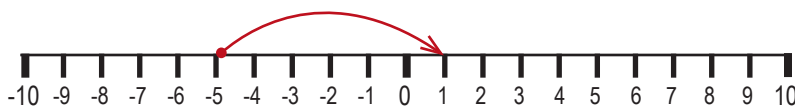
$$-3 + 7 = \underline{4}$$

F)



$$-2 + (-8) = \underline{-10}$$

G)



$$-5 + 6 = \underline{1}$$

H)



$$-4 + (-4) = \underline{-8}$$