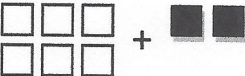






Write a numerical expression for each model. Then find the sum. Let each white tile equal +1 and each black tile equal -1.

1)  +

2)  +

3)  +

4)  +

5)  +

6)  +

Use the Rules for Adding Integers to find each sum.

7)  $5 + (-4)$

8)  $10 + (-5)$

9)  $-3 + 5$

10)  $4 + (-12)$

11)  $-20 + 5$

12)  $-5 + 5$

13)  $-25 + (-25)$

14)  $1000000 + (-1000000)$

15)  $-2 + 5 + (-1)$