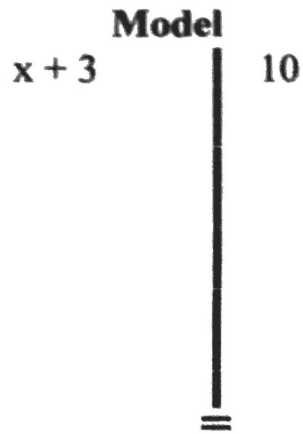


Name: _____

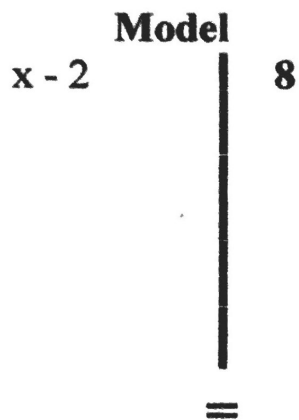
Date: _____

Solve

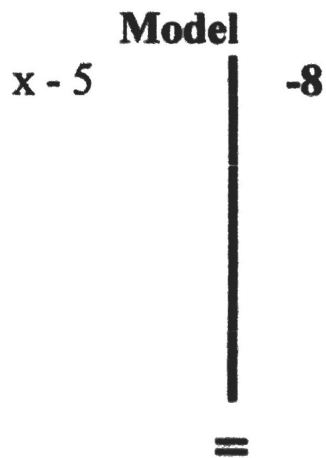
1. $x + 3 = 10$



2. $x - 2 = 8$



3. $x - 5 = -8$



4. $x + 2 = 7$

